

A CHRISTMAS SCARROLL P.38

GAMES

DECEMBER 2022



WORLD OF PUZZLES®

FOR CREATIVE MINDS AT PLAY

CROSSWORDS + LOGIC + CONTEST + FEATURES

Featuring... COLD SPELL

Pocket Science p.33

Co-Starstruck Contest p.44

This Old Game p.48

Also...

Rikudo p.13

HexaCross p.30

End View p.55



\$4.99 US
Display Until 11/22/2022

0 09128 45017 9

↻ **DECODE THIS MESSAGE AND YOU'LL DISCOVER SOMETHING FUN ABOUT THIS ISSUE.**

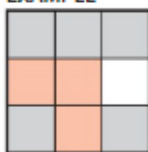
FOREST OF NUMBERS

BY RODOLFO KURCHAN & CLAUDIO MELLER

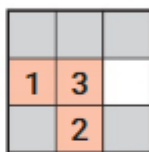
In these puzzles, you start by placing the numbers 1, 2, and 3 in the pink squares. Then, you have to put the numbers from 4 onwards in order in the gray squares with the condition that each number is the sum of its neighbors that are already placed horizontally, vertically, and diagonally. You cannot put numbers in the white squares.

ANSWERS, PAGE 77

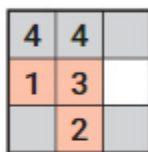
EXAMPLE



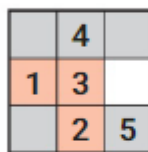
FILL THIS 3x3 DIAGRAM WITH THE NUMBERS 1 THROUGH 3.



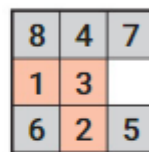
FIRST, YOU PLACE THE NUMBERS 1, 2 AND 3 IN THE PINK SQUARES. THIS IS ONE OF THE POSSIBILITIES.



NOW YOU HAVE TO PLACE THE 4. YOU HAVE TWO OPTIONS (4 = 1 + 3).

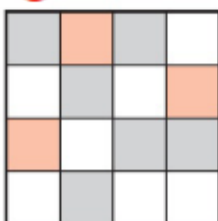


IF YOU CHOOSE THIS POSSIBILITY FOR 4, THEN YOU HAVE ONLY ONE PLACE TO PUT THE 5 (5 HERE = 2 + 3).

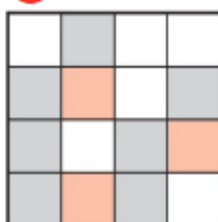


THEN YOU CAN PLACE IN ORDER THE NUMBERS 6 (IN THIS CASE 1 + 2 + 3), 7 (IN THIS CASE 3 + 4) AND 8 (IN THIS CASE 1 + 3 + 4).

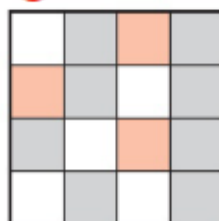
1 4x4: 1 ▶ 9



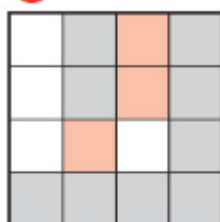
2 4x4: 1 ▶ 10



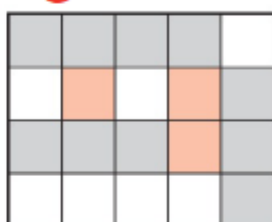
3 4x4: 1 ▶ 11



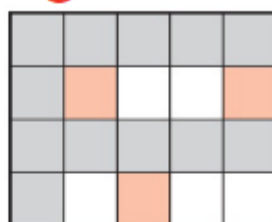
4 4x4: 1 ▶ 12



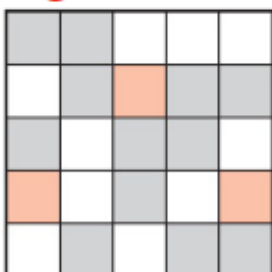
5 4x5: 1 ▶ 13



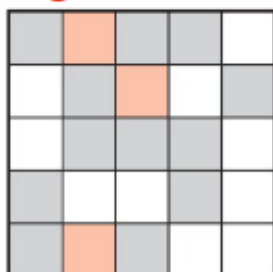
6 4x5: 1 ▶ 15



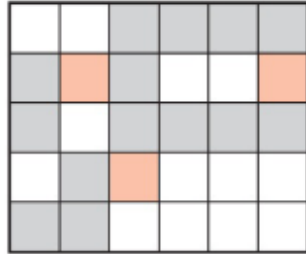
7 5x5: 1 ▶ 15



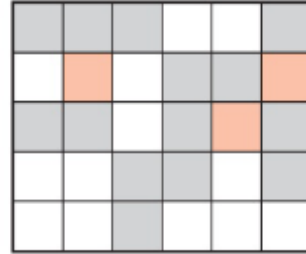
8 5x5: 1 ▶ 15



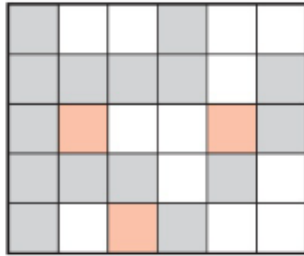
9 5x6: 1▶17



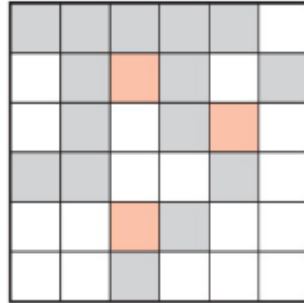
10 5x6: 1▶17



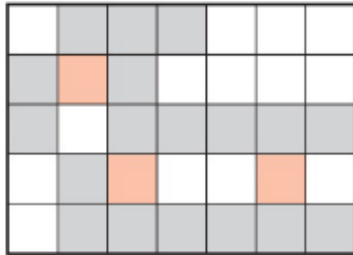
11 5x6: 1▶18



12 6x6: 1▶18



13 5x7: 1▶21



14 6x7: 1▶22

